



2012 CY

Test Paper Code: CY

Time: 3 Hours

Maximum Marks: 300

INSTRUCTIONS

1. This question-cum-answer booklet has **40** pages and has **44** questions. Please ensure that the copy of the question-cum-answer booklet you have received contains all the questions.
2. Write your **Registration Number, Name and the name of the Test Centre** in the appropriate space provided on the right side.
3. Write the answers to the objective questions against each Question No. in the **Answer Table for Objective Questions**, provided on Page No. **7**. Do not write anything else on this page.
4. Each objective question has **4 choices** for its answer: (A), (B), (C) and (D). Only **ONE** of them is the correct answer. There will be **negative marking** for wrong answers to objective questions. The following marking scheme for objective questions shall be used:
 - (a) For each correct answer, you will be awarded **3 (Three)** marks.
 - (b) For each wrong answer, you will be awarded **-1 (Negative one)** mark.
 - (c) Multiple answers to a question will be treated as a wrong answer.
 - (d) For each un-attempted question, you will be awarded **0 (Zero)** mark.
 - (e) Negative marks for objective part will be carried over to total marks.
5. Answer the subjective question only in the space provided after each question.
6. Do not write more than one answer for the same question. In case you attempt a subjective question more than once, please cancel the answer(s) you consider wrong. Otherwise, the answer appearing last only will be evaluated.
7. All answers must be written in blue/black/blue-black ink only. Sketch pen, pencil or ink of any other colour should not be used.
8. All rough work should be done in the space provided and scored out finally.
9. No supplementary sheets will be provided to the candidates.
10. **Clip board, log tables, slide rule, calculator, cellular phone and electronic gadgets in any form are NOT allowed.**
11. The question-cum-answer booklet must be returned in its entirety to the Invigilator before leaving the examination hall. Do not remove any page from this booklet.

2012 CY

READ INSTRUCTIONS ON THE LEFT SIDE OF THIS PAGE CAREFULLY

REGISTRATION NUMBER				
Name:				
Test Centre:				

Do not write your Registration Number or Name anywhere else in this question-cum-answer booklet.

I have read all the instructions and shall abide by them.

.....

Signature of the Candidate

I have verified the information filled by the Candidate above.

.....

Signature of the Invigilator

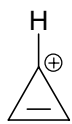
tutoriaalpoint.org

IMPORTANT NOTE FOR CANDIDATES

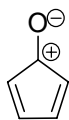
- Questions 1-30 (objective questions) carry three marks each and questions 31-44 (subjective questions) carry fifteen marks each.
- Write the answers to the objective questions in the Answer Table for Objective Questions provided on page 7 only.

- Q.1 Molecular shape of SOCl_2 is
- (A) square planar (B) trigonal pyramidal
(C) triangular planar (D) T-shaped
- Q.2 Number of three-centre two-electron ($3c-2e$) bonds present in diborane is
- (A) 2 (B) 4 (C) 6 (D) 8
- Q.3 The lattice energy of LiF calculated from *Born-Landé* equation is $-1000 \text{ kJ mol}^{-1}$. Assume that for both LiF and MgO the Madelung constants, interionic distances and Born exponents have the same value. The lattice energy of MgO in kJ mol^{-1} is
- (A) -4000 (B) -2000 (C) 2000 (D) 4000
- Q.4 The compound formed by dissolving elemental gold in *aqua regia* is
- (A) AuCl (B) AuNO₃
(C) $\text{H}[\text{AuCl}_4]$ (D) $\text{H}[\text{Au}(\text{NO}_3)_4]$
- Q.5 Number of moles of ions produced by complete dissociation of one mole of Mohr's salt in water is
- (A) 3 (B) 4 (C) 5 (D) 6
- Q.6 The tetrachloro complexes of Ni(II) and Pd(II) respectively, are (atomic numbers of Ni and Pd are 28 and 46 respectively)
- (A) diamagnetic and diamagnetic (B) paramagnetic and paramagnetic
(C) diamagnetic and paramagnetic (D) paramagnetic and diamagnetic
- Q.7 The total number of steps involved and number of beta particles emitted in the spontaneous decay of ${}_{92}^{238}\text{U} \rightarrow {}_{82}^{208}\text{Pb}$ respectively, are
- (A) 8 and 6 (B) 14 and 6 (C) 6 and 8 (D) 14 and 8
- Q.8 A filter paper moistened with ammoniacal sodium nitroprusside solution turns violet on contact with a drop of alkaline Na_2S solution. The violet color is due to the formation of
- (A) $[\text{Fe}(\text{SCN})_5(\text{NO})]^{1-}$ (B) $[\text{Fe}(\text{SCN})_5(\text{NO})]^{2-}$
(C) $[\text{Fe}(\text{CN})_5(\text{NOS})]^{3-}$ (D) $[\text{Fe}(\text{CN})_5(\text{NOS})]^{4-}$

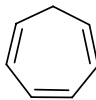
Q.9 The species/compounds that are aromatic among the following are



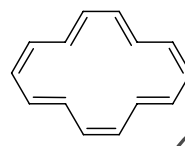
P



Q



R



S

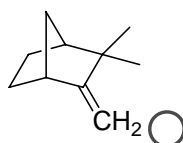
(A) R and S

(B) P and Q

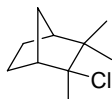
(C) Q and S

(D) P and S

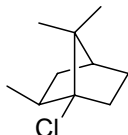
Q.10 The major product obtained in the reaction below is



(A)



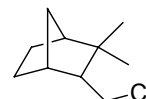
(B)



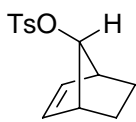
(C)



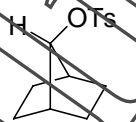
(D)



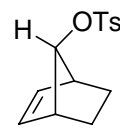
Q.11 The rates of acetolysis for the following norbornyl derivatives are in the order



P



Q



R

(A) $R > Q > P$

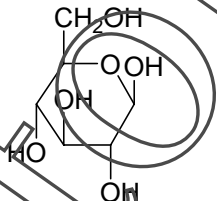
(B) $Q > R > P$

(C) $P > R > Q$

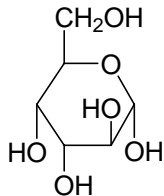
(D) $R > P > Q$

Q.12 The Haworth projection for α -anomer of D-glucose is

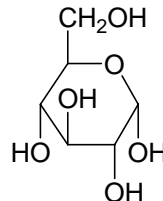
(A)



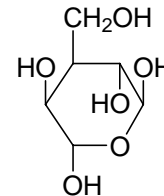
(B)



(C)



(D)



Q.13 The complementary DNA sequence of the given DNA 5'-G-A-A-T-T-C-3' is

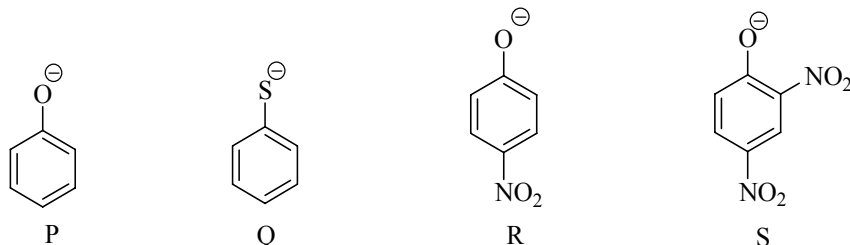
(A) 5'-C-T-T-A-A-G-3'

(B) 5'-C-U-U-A-A-G-3'

(C) 3'-C-T-T-A-A-G-5'

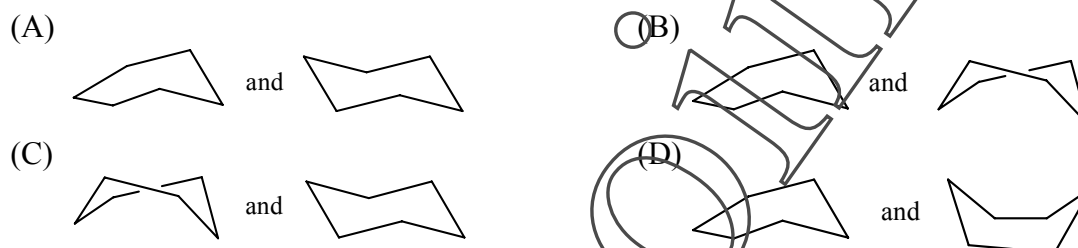
(D) 3'-G-A-A-T-T-C-5'

Q.14 The order of nucleophilicity of the following anions in a S_N2 reaction is

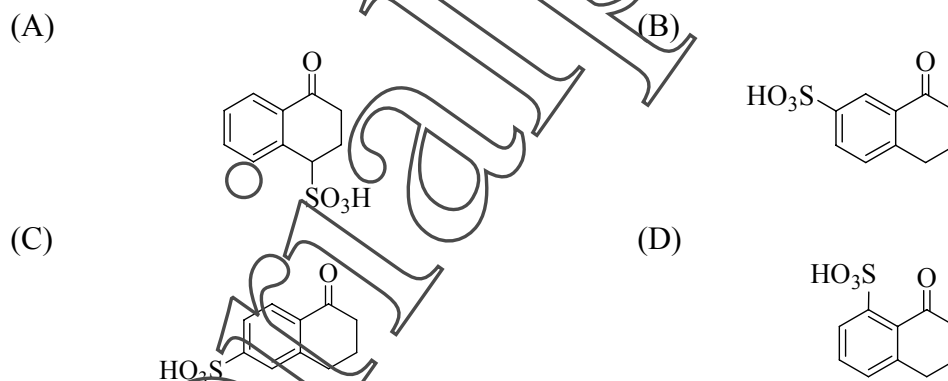


- (A) $Q > R > S > P$ (B) $Q > P > R > S$ (C) $Q > R > P > S$ (D) $P > S > R > Q$

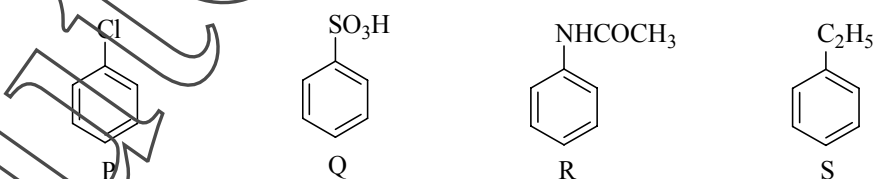
Q.15 The pair of conformation that has maximum energy difference is



Q.16 The major mono-sulfonation product of α -tetralone is

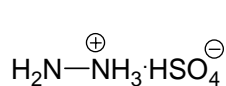


Q.17 Electrophilic nitrations of the following compounds follow the trend

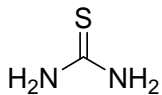


- (A) $S > R > P > Q$ (B) $R > S > P > Q$ (C) $R > P > S > Q$ (D) $P > S > R > Q$

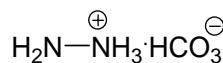
Q.18 The compounds those would not respond to tests of both nitrogen and sulfur with sodium fusion extracts are



I



II



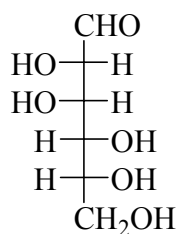
III



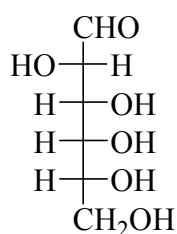
IV

- (A) I and III (B) III and IV (C) I and IV (D) II and IV

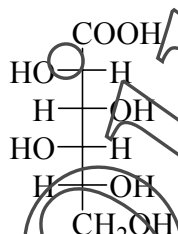
Q.19 The correct epimeric pair of the following is



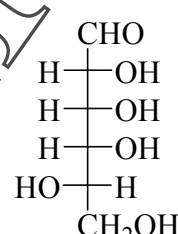
P



Q



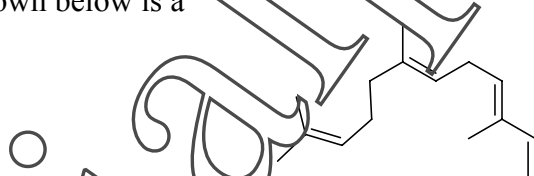
R



S

- (A) P and Q (B) R and Q (C) Q and S (D) R and S

Q.20 α -Farnesene shown below is a



- (A) diterpene having two isoprene units
 (B) triterpene having three isoprene units
 (C) triterpene having four isoprene units
 (D) sesquiterpene having three isoprene units

Q.21 For the equilibrium $\text{N}_2 + 3\text{H}_2 \rightleftharpoons 2\text{NH}_3$, the equilibrium constant, K_p is expressed as

(A) $3^3 K_p = \frac{P_{\text{NH}_3}^2}{P_{\text{N}_2}^2 P_{\text{H}_2}^3}$

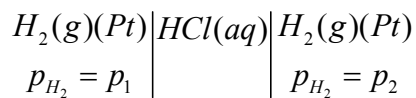
(B) $3^3 K_p = \frac{P_{\text{NH}_3}^2}{P_{\text{N}_2} P_{\text{H}_2}^3}$

(C) $3^3 K_p = \frac{P_{\text{NH}_3}^2}{P_{\text{N}_2}^4}$

(D) $3^{3/2} K_p^{1/2} = \frac{P_{\text{NH}_3}^2}{P_{\text{N}_2}^4}$

- Q.22 The average speed of H_2 , N_2 and O_2 gas molecules is in the order
- (A) $\text{H}_2 > \text{N}_2 > \text{O}_2$ (B) $\text{O}_2 > \text{N}_2 > \text{H}_2$
(C) $\text{H}_2 > \text{O}_2 > \text{N}_2$ (D) $\text{N}_2 > \text{O}_2 > \text{H}_2$
- Q.23 The enthalpy of vaporization ($\Delta_{\text{vap}}H$) is zero at
- (A) Boyle temperature (B) critical temperature
(C) inversion temperature (D) boiling temperature
- Q.24 The half-life of any zero-order reaction is
- (A) independent of concentration
(B) proportional to inverse of concentration
(C) proportional to concentration
(D) proportional to square of the concentration
- Q.25 The molality of $(\text{NH}_4)_2\text{SO}_4$ solution that has the same ionic strength as 1 mol kg^{-1} solution of KCl is
- (A) $1/3 \text{ mol kg}^{-1}$ (B) $1/2 \text{ mol kg}^{-1}$
(C) $2/5 \text{ mol kg}^{-1}$ (D) $3/5 \text{ mol kg}^{-1}$
- Q.26 The standard enthalpy of formation ($\Delta_f H_{300}^0$) at 1 bar and 300 K for the formation of $\text{CF}_2\text{ClCF}_2\text{Cl}$ (g) from its constituent elements in the standard state is -900 kJ mol^{-1} . Given $R = 8.3 \text{ J K}^{-1} \text{ mol}^{-1}$, the standard internal energy of formation ($\Delta_f U_{300}^0$) at the same pressure and temperature is
- (A) -905 kJ mol^{-1} (B) -895 kJ mol^{-1}
(C) 895 kJ mol^{-1} (D) 905 kJ mol^{-1}
- Q.27 The percent transmittance of a solution having absorbance (optical density) 1.0 is
- (A) 1 (B) 10 (C) 50 (D) 99
- Q.28 The matrix which transforms $\begin{pmatrix} x \\ y \end{pmatrix}$ to $\begin{pmatrix} -y \\ -x \end{pmatrix}$ is
- (A) $\begin{pmatrix} -1 & -1 \\ 1 & 1 \end{pmatrix}$ (B) $\begin{pmatrix} -1 \\ -1 \end{pmatrix}$
(C) $\begin{pmatrix} 1 & 0 \\ 0 & -1 \end{pmatrix}$ (D) $\begin{pmatrix} 0 & -1 \\ -1 & 0 \end{pmatrix}$

Q.29 A concentration cell with two hydrogen electrodes at two different pressures is depicted as



The potential (E_{cell}) of the cell is

(A) $\frac{RT}{F} \ln \frac{p_2}{p_1}$

(B) $\frac{RT}{F} \ln \frac{p_1}{p_2}$

(C) $\frac{RT}{2F} \ln \frac{p_2}{p_1}$

(D) $\frac{RT}{2F} \ln \frac{p_1}{p_2}$

Q.30 An aqueous solution containing 1 g L^{-1} of a polymer exerts osmotic pressure of 4 torr at 300 K. Given $R = 0.082 \text{ L atm}$, the molar mass (g mol^{-1}) of the polymer is

(A) 4500

(B) 4564

(C) 4674

(D) 4800

Answer Table for Objective Questions

Write the Code of your chosen answer only in the 'Answer' column against each Question Number. Do not write anything else on this page.

Question Number	Answer	Do not write in this column	Question Number	Answer	Do not write in this column
01			16		
02			17		
03			18		
04			19		
05			20		
06			21		
07			22		
08			23		
09			24		
10			25		
11			26		
12			27		
13			28		
14			29		
15			30		

FOR EVALUATION ONLY

Number of Correct Answers		Marks	(+)
Number of Incorrect Answers		Marks	(-)
Total Marks in Question 1-30			()

Q.31

(a) Identify the most acidic compound from the following: $\text{CH}_3\text{-CH}_3$, $\text{CH}_2=\text{CH}_2$ and $\text{CH}\equiv\text{CH}$, and justify your answer. Draw overlap of the orbitals to show bonding in the most acidic compound using the concept of hybridization. (9)

(b) Write a balanced chemical equation to represent acid-base reaction of orthoboric acid in water.

Addition of ethylene glycol to aqueous orthoboric acid enhances its acidity. Explain the above statement using appropriate chemical equation. (6)

Tutor's Point

AutoOrientalPoint.Org

Q.32

- (a) Draw the unit cell structure of NaCl. Calculate the limiting radius ratio of any ionic solid having NaCl like structure. (9)
- (b) Give molecular formula and structure of the compound formed by reaction of $\text{Be}(\text{OH})_2$ with acetic acid. (6)

tutoronlinepoint.com

AutoOriginalPoint.Org

Q.33

- (a) The spin-only magnetic moments of $K_3[Fe(oxalate)_3]$ and $K_3[Ru(oxalate)_3]$ are $5.91 \mu_B$ and $1.73 \mu_B$, respectively. Write down their ligand field electronic configurations. Justify your answer. Atomic numbers of Fe and Ru are 26 and 44 respectively. (9)
- (b) Draw the structures of NO_2^+ , NO_2 and NO_2^- . Arrange them in the increasing order of O–N–O bond angles. (6)

AutoOriginalPoint.Org

Q.34

- (a) Show with labels the splitting of d -orbitals in an octahedral ligand field. Calculate the CFSE of (i) high spin d^6 and (ii) low spin d^6 metal ions in octahedral field. (9)
- (b) Schematically represent orbital overlaps in metal carbonyls. Show the correct signs of the lobes. (6)

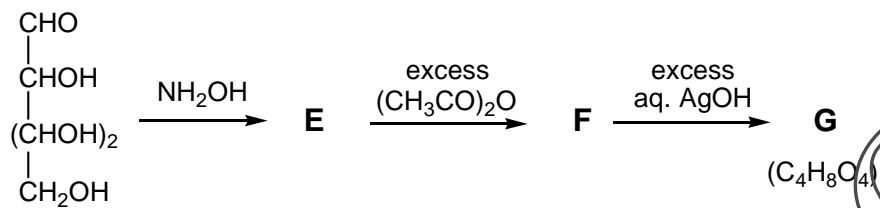
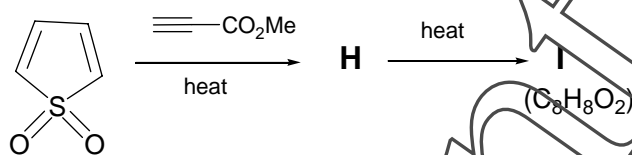
AutoOrientalPoint.Org

Q.35

- (a) A coordination compound is composed of one Co(III), one chloride, one sulfate and four molecules of ammonia. The aqueous solution of the compound gives no precipitate when combined with aqueous BaCl_2 , while a white precipitate is formed with aqueous AgNO_3 solution. Draw its structure and explain the observations with chemical equations. (9)
- (b) Draw the structures of dimethylglyoxime (DMGH_2) and its Ni(II) complex formed in aqueous ammonia. (6)

AutoOriginalPoint.Org

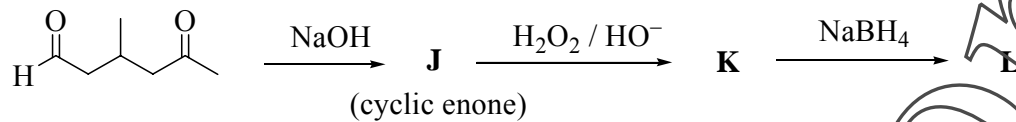
Q.36

(a) Write the structures of **E**, **F** and **G** in the following scheme of reactions (9)(b) Identify the structures of **H** and **I** in the following synthetic transformation (6)

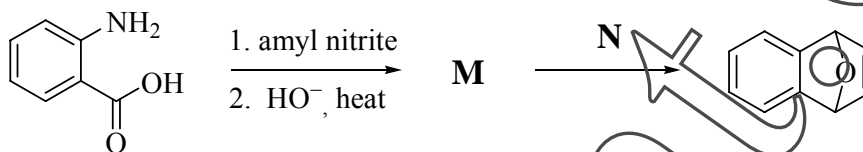
AutoOrientalPoint.Org

Q.37

- (a) Complete the following reaction sequence with appropriate structures of **J**, **K** and **L**. (9)

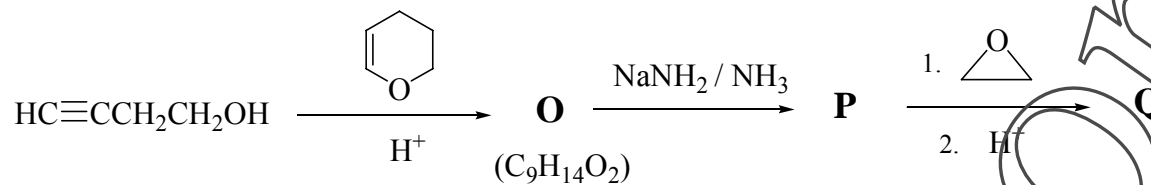
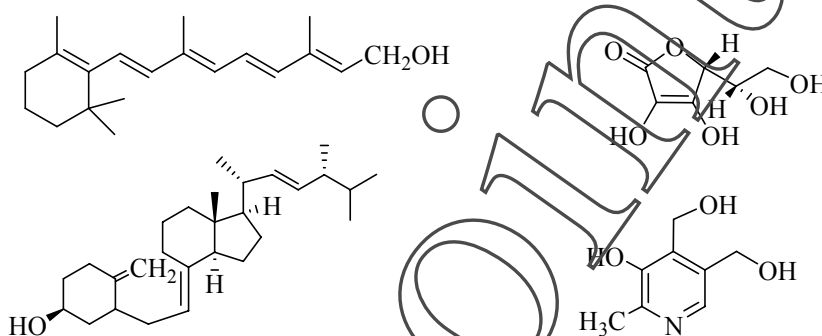


- (b) Identify the structures of **M** and **N** in the following synthetic transformation (6)



AutoOriginalPoint.Org

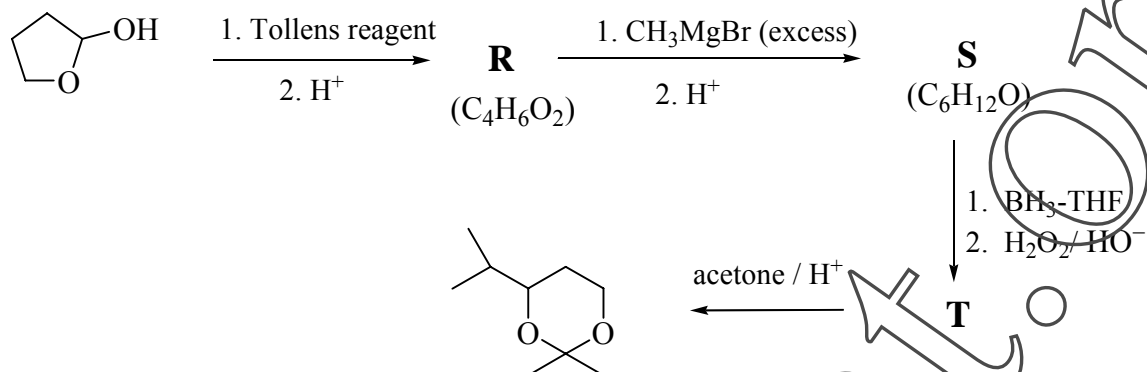
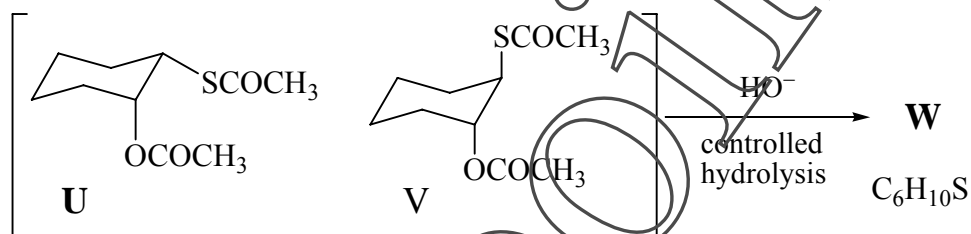
Q.38

(a) In the following reaction scheme, write the structures of **O**, **P** and **Q**.(b) Given below are structures of some natural products. Identify them as vitamin A, B₆, C, and D and classify them according to their classes (*isoprenoid*, *alkaloid*, *carbohydrate* and *steroid*).

(6)

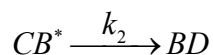
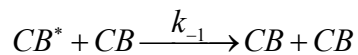
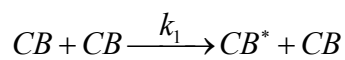
AutoOriginalPoint.Org

Q.39

(a) Write the appropriate structures for **R**, **S** and **T** in the following scheme.(b) Choose the correct stereoisomer between **U** and **V** that would furnish **W** on controlled hydrolysis. Write the stable conformation of **W**.

AutoOrientalPoint.Org

Q.40 The mechanism of isomerization of cyclobutene (CB) to 1,3-butadiene (BD) is as follows.



(a) Show that the rate law is $\frac{d[DB]}{dt} = \frac{k_2 \cdot k_1 \cdot [CB]^2}{k_{-1} \cdot [CB] + k_2}$. (6)

(b) The apparent first-order rate constant, $k_{app} = \frac{k_2 \cdot k_1 \cdot [CB]}{k_{-1} \cdot [CB] + k_2}$. At the CB concentration of $1 \times 10^{-5} \text{ mol dm}^{-3}$, the value of k_{app} reaches 50% of its limiting value obtained at very high concentrations of CB . Evaluate the ratio $\frac{k_2}{k_{-1}}$. (9)

AutoOriginalPoint.Org

- Q.41 (a) The molar conductance of $0.012 \text{ mol dm}^{-3}$ aqueous solution of chloroacetic acid is $100 \text{ } \Omega^{-1} \text{ cm}^2 \text{ mol}^{-1}$. The ion conductance of chloroacetate and H^+ ions are $50 \text{ } \Omega^{-1} \text{ cm}^2 \text{ mol}^{-1}$ and $350 \text{ } \Omega^{-1} \text{ cm}^2 \text{ mol}^{-1}$, respectively. Calculate (i) degree of dissociation and pK_a of chloroacetic acid, and (ii) H^+ ion concentration in the solution. (9)
- (b) Sketch the conductivity versus concentration of base curves for the titration of aqueous solutions of acetic acid (i) with NaOH , and (ii) with NH_4OH . (6)

AutoOrientalPoint.Org

Q.42 A solution of a free particle Schrödinger equation $\frac{-\hbar^2}{8\pi^2m} \frac{d^2\psi(x)}{dx^2} = E\psi(x)$ is $\psi(x) = e^{ikx} = \cos kx + i \sin kx$

(a) Derive expressions for energy ' E ' and momentum ' p ' of the particle. (9)

(b) Using the above relations, show that the wavelength (λ) is $\frac{h}{p}$. (6)

AutoOrientalPoint.Org

- Q.43 (a) Sketch the temperature-composition phase diagram at 1 atm pressure for the ethanol-water system.
- Label all the areas in the diagram.
 - Indicate the temperature at which the composition of the vapor is same as that of the liquid. What is this mixture known as?
 - What is the degree of freedom at the corresponding composition? (9)
- (b) Estimate the pressure necessary to melt ice at $-10\text{ }^{\circ}\text{C}$ if the molar volume of liquid water is 18.01 mL and molar volume of ice is 19.64 mL. The entropy change for the melting process is 16.3 J K^{-1} . Assume that the molar volumes and entropy change remain constant in this temperature range. [100 J = 1 L bar] (6)

AutoOrientalPoint.Org

Q.44

(a) (i) Show that for n moles of a van der Waals gas, $\left(\frac{\partial U}{\partial V}\right)_T = \frac{n^2 a}{V^2}$.

(ii) Can a gas that obeys the equation of state $p(V - nb) = nRT$ be liquefied? Explain.

(b) Consider ideal mixing of 2 moles of toluene and 2 moles of benzene at 1 atm and 300 K. Calculate the values of $\Delta_{\text{mix}}V$, $\Delta_{\text{mix}}U$, $\Delta_{\text{mix}}H$, $\Delta_{\text{mix}}G$, and $\Delta_{\text{mix}}S$ for the process. ($\ln 2 = 0.69$)

(9)

(6)

AutoOrientalPoint.Org

SPACE FOR ROUGH WORK

tutoriaelpoint.org

SPACE FOR ROUGH WORK

tutoriaelpoint.org

SPACE FOR ROUGH WORK

tutoriaelpoint.org

SPACE FOR ROUGH WORK



tutoriaalpoint.Org

2012 CY Objective Part (Question Number 1 – 30)	
Total Marks	Signature

Subjective Part					
Question Number	Marks		Question Number	Marks	
31			38		
32			39		
33			40		
34			41		
35			42		
36			43		
37			44		
Total Marks in Subjective Part					

Total (Objective Part)	:	
Total (Subjective Part)	:	
Grand Total	:	
Total Marks (in words)	:	
Signature of Examiner(s)	:	
Signature of Head Examiner(s)	:	
Signature of Scrutinizer	:	
Signature of Chief Scrutinizer	:	
Signature of Coordinating Head Examiner	:	